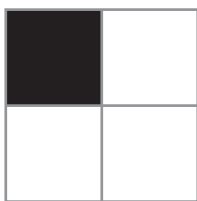


## Identify Fractions

Write a fraction for the shaded part. Write a fraction for the unshaded part.



$$\frac{1}{4}$$


---

Shaded

$$\frac{3}{4}$$

---

Unshaded

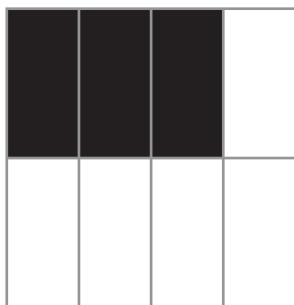


---

Shaded

---

Unshaded




---

Shaded

---

Unshaded




---

Shaded

---

Unshaded



---


Shaded

---

Unshaded

## Identify Fractions

Write a fraction for the shaded part. Write a fraction for the unshaded part.



$$\frac{1}{4}$$

Shaded

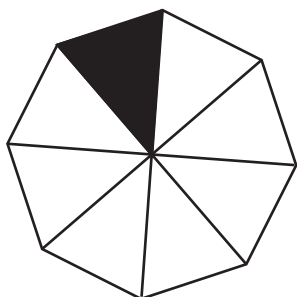
$$\frac{3}{4}$$

Unshaded



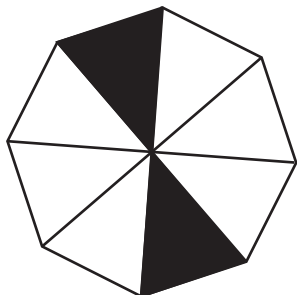
Shaded

Unshaded




Shaded

Unshaded



Shaded

Unshaded

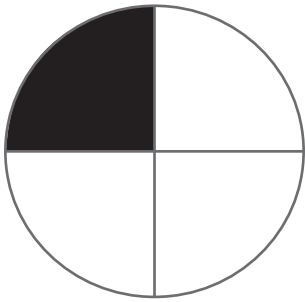


Shaded

Unshaded

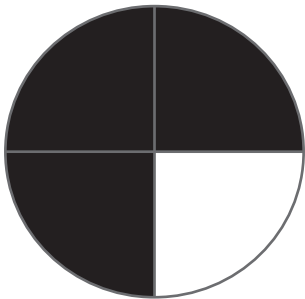
## Identify Fractions

Write a fraction for the shaded part. Write a fraction for the unshaded part.



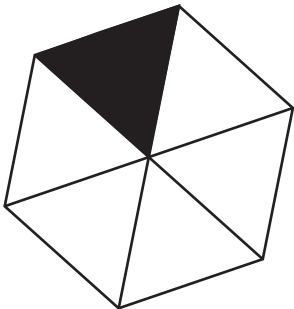
$\frac{1}{4}$   
-----  
Shaded

$\frac{3}{4}$   
-----  
Unshaded



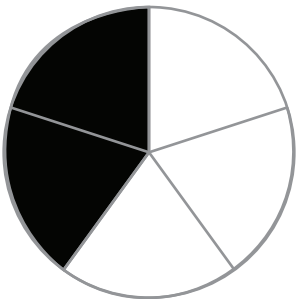
-----  
Shaded

-----  
Unshaded



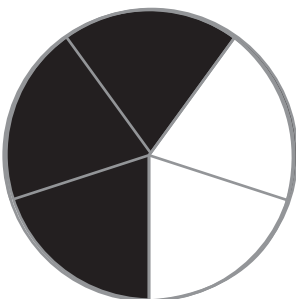
-----  
Shaded

-----  
Unshaded



-----  
Shaded

-----  
Unshaded



-----  
Shaded

-----  
Unshaded