

Three-digit Subtraction without Regrouping

Solve the problems below.

Find: 758 - 416

Step 1

Subtract the ones
(8 - 6 = 2)

H	T	O
7	5	8
- 4	1	6
		2

Step 2

Subtract the tens
(5 - 1 = 4)

H	T	O
7	5	8
- 4	1	6
	4	2

Step 3

Subtract the hundreds
(7 - 4 = 3)

H	T	O
7	5	8
- 4	1	6
3	4	2


<table style="border-collapse: collapse; margin-left: auto; margin-right: auto;"> <tr><td style="padding: 5px;">H</td><td style="padding: 5px;">T</td><td style="padding: 5px;">O</td></tr> <tr><td style="padding: 5px; text-align: center;">4</td><td style="padding: 5px; text-align: center;">1</td><td style="padding: 5px; text-align: center;">2</td></tr> <tr><td style="padding: 5px; text-align: center;">- 2</td><td style="padding: 5px; text-align: center;">1</td><td style="padding: 5px; text-align: center;">1</td></tr> <tr><td style="padding: 5px;"> </td><td> </td><td> </td></tr> <tr><td> </td><td> </td><td> </td></tr> </table>	H	T	O	4	1	2	- 2	1	1							<table style="border-collapse: collapse; margin-left: auto; margin-right: auto;"> <tr><td style="padding: 5px;">H</td><td style="padding: 5px;">T</td><td style="padding: 5px;">O</td></tr> <tr><td style="padding: 5px; text-align: center;">7</td><td style="padding: 5px; text-align: center;">7</td><td style="padding: 5px; text-align: center;">6</td></tr> <tr><td style="padding: 5px; text-align: center;">- 6</td><td style="padding: 5px; text-align: center;">1</td><td style="padding: 5px; text-align: center;">6</td></tr> <tr><td> </td><td> </td><td> </td></tr> <tr><td> </td><td> </td><td> </td></tr> </table>	H	T	O	7	7	6	- 6	1	6							<table style="border-collapse: collapse; margin-left: auto; margin-right: auto;"> <tr><td style="padding: 5px;">H</td><td style="padding: 5px;">T</td><td style="padding: 5px;">O</td></tr> <tr><td style="padding: 5px; text-align: center;">6</td><td style="padding: 5px; text-align: center;">3</td><td style="padding: 5px; text-align: center;">9</td></tr> <tr><td style="padding: 5px; text-align: center;">- 4</td><td style="padding: 5px; text-align: center;">2</td><td style="padding: 5px; text-align: center;">8</td></tr> <tr><td> </td><td> </td><td> </td></tr> <tr><td> </td><td> </td><td> </td></tr> </table>	H	T	O	6	3	9	- 4	2	8							<table style="border-collapse: collapse; margin-left: auto; margin-right: auto;"> <tr><td style="padding: 5px;">H</td><td style="padding: 5px;">T</td><td style="padding: 5px;">O</td></tr> <tr><td style="padding: 5px; text-align: center;">3</td><td style="padding: 5px; text-align: center;">6</td><td style="padding: 5px; text-align: center;">1</td></tr> <tr><td style="padding: 5px; text-align: center;">- 2</td><td style="padding: 5px; text-align: center;">3</td><td style="padding: 5px; text-align: center;">1</td></tr> <tr><td> </td><td> </td><td> </td></tr> <tr><td> </td><td> </td><td> </td></tr> </table>	H	T	O	3	6	1	- 2	3	1							<table style="border-collapse: collapse; margin-left: auto; margin-right: auto;"> <tr><td style="padding: 5px;">H</td><td style="padding: 5px;">T</td><td style="padding: 5px;">O</td></tr> <tr><td style="padding: 5px; text-align: center;">7</td><td style="padding: 5px; text-align: center;">2</td><td style="padding: 5px; text-align: center;">6</td></tr> <tr><td style="padding: 5px; text-align: center;">- 7</td><td style="padding: 5px; text-align: center;">1</td><td style="padding: 5px; text-align: center;">6</td></tr> <tr><td> </td><td> </td><td> </td></tr> <tr><td> </td><td> </td><td> </td></tr> </table>	H	T	O	7	2	6	- 7	1	6						
H	T	O																																																																													
4	1	2																																																																													
- 2	1	1																																																																													
H	T	O																																																																													
7	7	6																																																																													
- 6	1	6																																																																													
H	T	O																																																																													
6	3	9																																																																													
- 4	2	8																																																																													
H	T	O																																																																													
3	6	1																																																																													
- 2	3	1																																																																													
H	T	O																																																																													
7	2	6																																																																													
- 7	1	6																																																																													
<table style="border-collapse: collapse; margin-left: auto; margin-right: auto;"> <tr><td style="padding: 5px;">H</td><td style="padding: 5px;">T</td><td style="padding: 5px;">O</td></tr> <tr><td style="padding: 5px; text-align: center;">8</td><td style="padding: 5px; text-align: center;">6</td><td style="padding: 5px; text-align: center;">6</td></tr> <tr><td style="padding: 5px; text-align: center;">- 7</td><td style="padding: 5px; text-align: center;">5</td><td style="padding: 5px; text-align: center;">3</td></tr> <tr><td> </td><td> </td><td> </td></tr> <tr><td> </td><td> </td><td> </td></tr> </table>	H	T	O	8	6	6	- 7	5	3							<table style="border-collapse: collapse; margin-left: auto; margin-right: auto;"> <tr><td style="padding: 5px;">H</td><td style="padding: 5px;">T</td><td style="padding: 5px;">O</td></tr> <tr><td style="padding: 5px; text-align: center;">4</td><td style="padding: 5px; text-align: center;">2</td><td style="padding: 5px; text-align: center;">4</td></tr> <tr><td style="padding: 5px; text-align: center;">- 2</td><td style="padding: 5px; text-align: center;">1</td><td style="padding: 5px; text-align: center;">3</td></tr> <tr><td> </td><td> </td><td> </td></tr> <tr><td> </td><td> </td><td> </td></tr> </table>	H	T	O	4	2	4	- 2	1	3							<table style="border-collapse: collapse; margin-left: auto; margin-right: auto;"> <tr><td style="padding: 5px;">H</td><td style="padding: 5px;">T</td><td style="padding: 5px;">O</td></tr> <tr><td style="padding: 5px; text-align: center;">6</td><td style="padding: 5px; text-align: center;">5</td><td style="padding: 5px; text-align: center;">1</td></tr> <tr><td style="padding: 5px; text-align: center;">- 3</td><td style="padding: 5px; text-align: center;">4</td><td style="padding: 5px; text-align: center;">1</td></tr> <tr><td> </td><td> </td><td> </td></tr> <tr><td> </td><td> </td><td> </td></tr> </table>	H	T	O	6	5	1	- 3	4	1							<table style="border-collapse: collapse; margin-left: auto; margin-right: auto;"> <tr><td style="padding: 5px;">H</td><td style="padding: 5px;">T</td><td style="padding: 5px;">O</td></tr> <tr><td style="padding: 5px; text-align: center;">6</td><td style="padding: 5px; text-align: center;">6</td><td style="padding: 5px; text-align: center;">6</td></tr> <tr><td style="padding: 5px; text-align: center;">- 5</td><td style="padding: 5px; text-align: center;">5</td><td style="padding: 5px; text-align: center;">2</td></tr> <tr><td> </td><td> </td><td> </td></tr> <tr><td> </td><td> </td><td> </td></tr> </table>	H	T	O	6	6	6	- 5	5	2							<table style="border-collapse: collapse; margin-left: auto; margin-right: auto;"> <tr><td style="padding: 5px;">H</td><td style="padding: 5px;">T</td><td style="padding: 5px;">O</td></tr> <tr><td style="padding: 5px; text-align: center;">9</td><td style="padding: 5px; text-align: center;">6</td><td style="padding: 5px; text-align: center;">2</td></tr> <tr><td style="padding: 5px; text-align: center;">- 8</td><td style="padding: 5px; text-align: center;">4</td><td style="padding: 5px; text-align: center;">2</td></tr> <tr><td> </td><td> </td><td> </td></tr> <tr><td> </td><td> </td><td> </td></tr> </table>	H	T	O	9	6	2	- 8	4	2						
H	T	O																																																																													
8	6	6																																																																													
- 7	5	3																																																																													
H	T	O																																																																													
4	2	4																																																																													
- 2	1	3																																																																													
H	T	O																																																																													
6	5	1																																																																													
- 3	4	1																																																																													
H	T	O																																																																													
6	6	6																																																																													
- 5	5	2																																																																													
H	T	O																																																																													
9	6	2																																																																													
- 8	4	2																																																																													

Two-digit Subtraction Using Models


Solve the problems below. Cross out the tens to subtract.




$20 - 10 = \underline{\quad}$




$30 - 20 = \underline{\quad}$




$40 - 30 = \underline{\quad}$




$50 - 20 = \underline{\quad}$




$60 - 20 = \underline{\quad}$




$70 - 60 = \underline{\quad}$



$80 - 40 = \underline{\quad}$




$90 - 50 = \underline{\quad}$




$50 - 30 = \underline{\quad}$

Two-digit Subtraction Using Models


Solve the problems below. Cross out the tens to subtract.




$$50 - 10 = \underline{\quad}$$



$$90 - 30 = \underline{\quad}$$




$$60 - 30 = \underline{\quad}$$




$$40 - 30 = \underline{\quad}$$




$$20 - 10 = \underline{\quad}$$




$$70 - 40 = \underline{\quad}$$



$$30 - 10 = \underline{\quad}$$



$$80 - 50 = \underline{\quad}$$



$$40 - 20 = \underline{\quad}$$