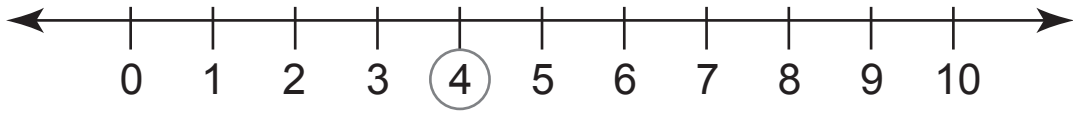
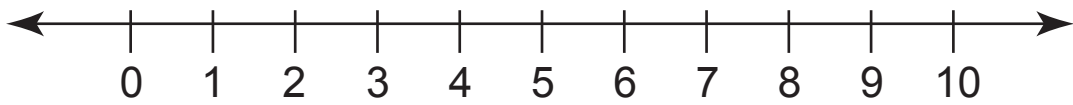


## Subtracting by 0

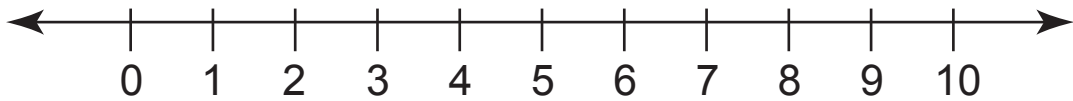
Find the difference using the number line.



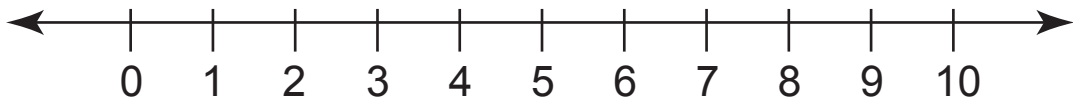
$$4 - 0 = \underline{\quad}$$



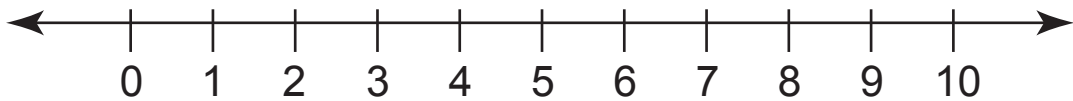
$$7 - 0 = \underline{\quad}$$



$$5 - 0 = \underline{\quad}$$



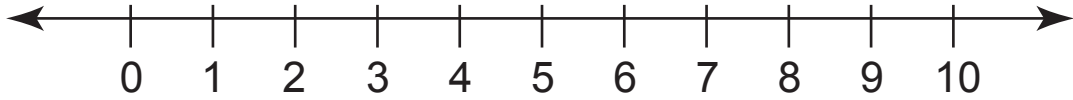
$$6 - 0 = \underline{\quad}$$



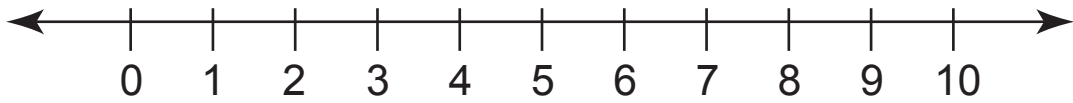
$$8 - 0 = \underline{\quad}$$

## Subtracting by 0

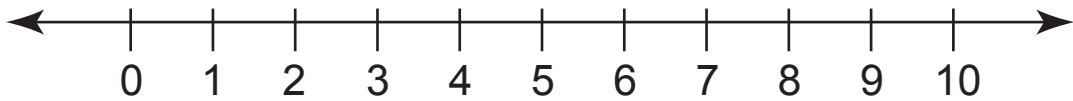
Find the difference using the number line.



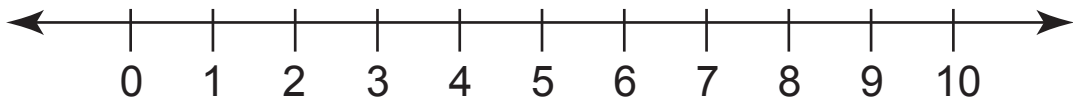
$$1 - 0 = \underline{\quad}$$



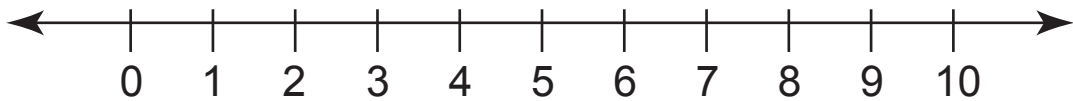
$$2 - 0 = \underline{\quad}$$



$$9 - 0 = \underline{\quad}$$



$$5 - 0 = \underline{\quad}$$



$$7 - 0 = \underline{\quad}$$