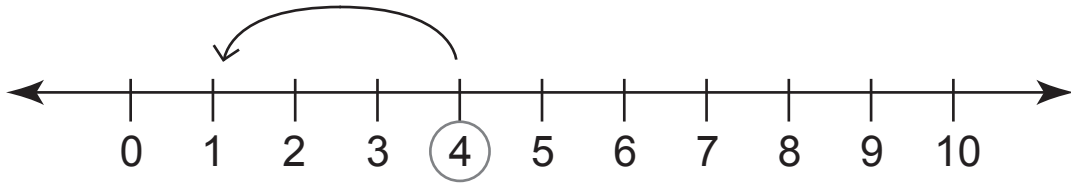
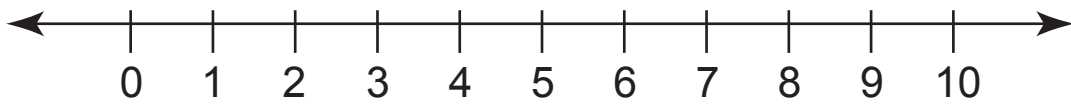


Subtracting by 3

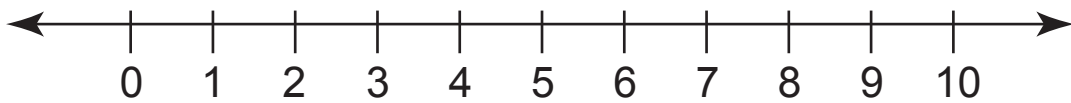
Find the difference using the number line.



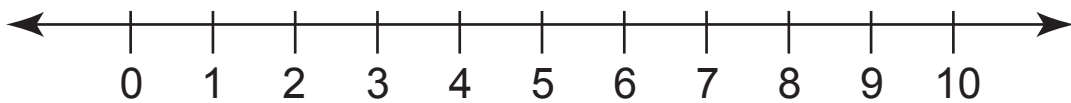
$$4 - 3 = \underline{\quad}$$



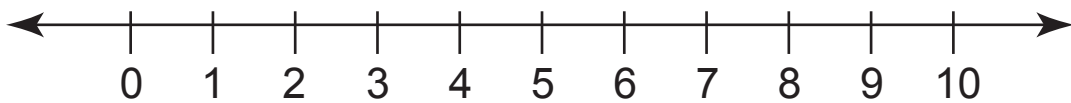
$$7 - 3 = \underline{\quad}$$



$$5 - 3 = \underline{\quad}$$



$$6 - 3 = \underline{\quad}$$



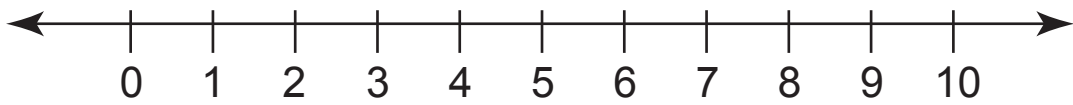
$$8 - 3 = \underline{\quad}$$

Subtracting by 3

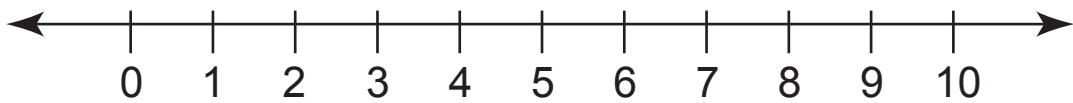
Find the difference using the number line.



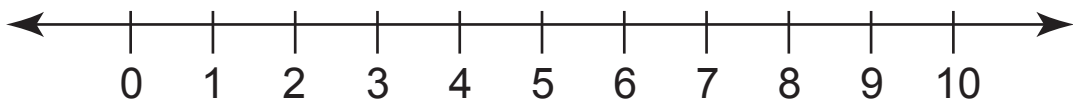
$$8 - 3 = \underline{\quad}$$



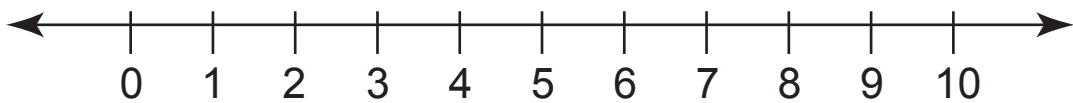
$$7 - 3 = \underline{\quad}$$



$$9 - 3 = \underline{\quad}$$



$$5 - 3 = \underline{\quad}$$



$$6 - 3 = \underline{\quad}$$