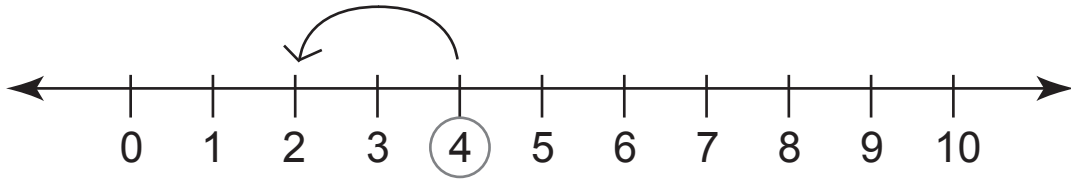
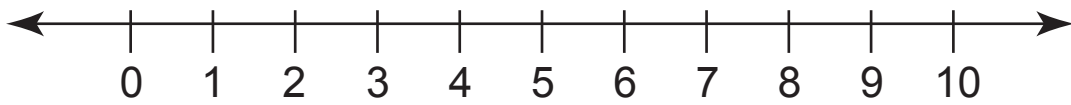


Subtracting by 2

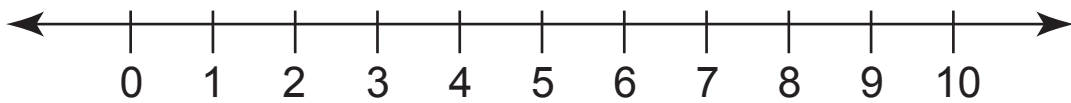
Find the difference using the number line.



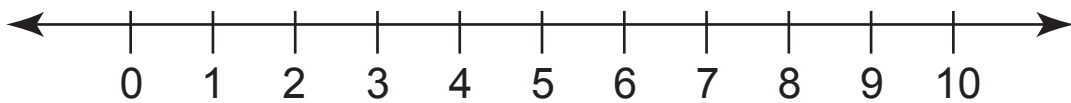
$$4 - 2 = \underline{\quad}$$



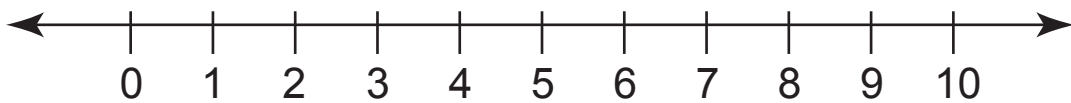
$$7 - 2 = \underline{\quad}$$



$$3 - 2 = \underline{\quad}$$



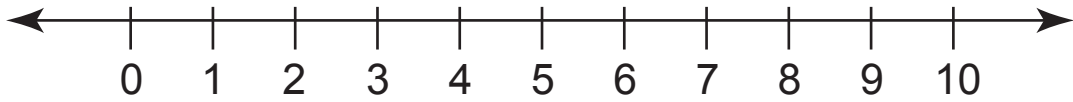
$$6 - 2 = \underline{\quad}$$



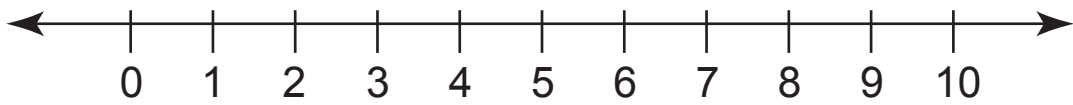
$$8 - 2 = \underline{\quad}$$

Subtracting by 2

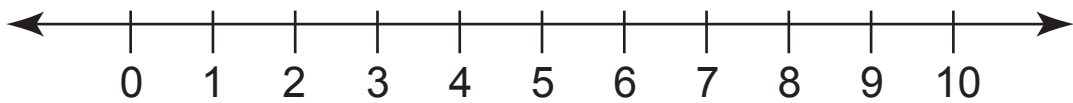
Find the difference using the number line.



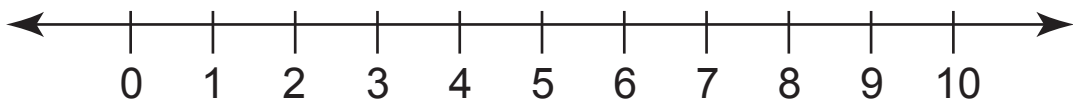
$$3 - 2 = \underline{\quad}$$



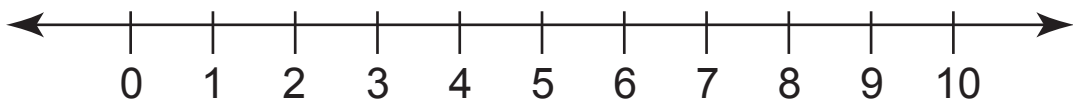
$$7 - 2 = \underline{\quad}$$



$$9 - 2 = \underline{\quad}$$



$$5 - 2 = \underline{\quad}$$



$$6 - 2 = \underline{\quad}$$