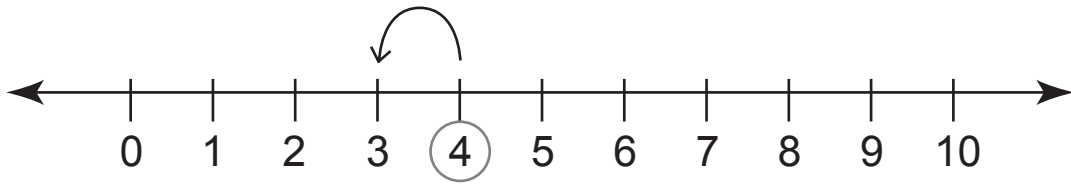
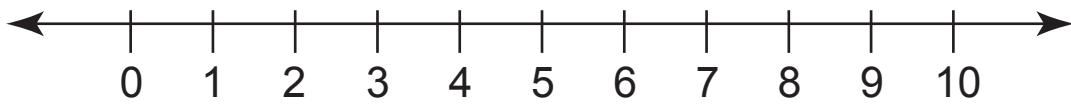


Subtracting by 1

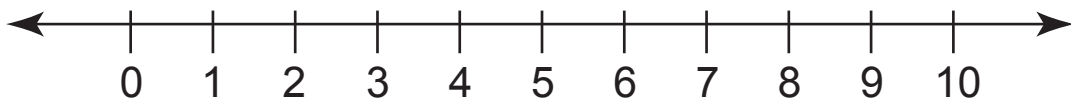
Find the difference using the number line.



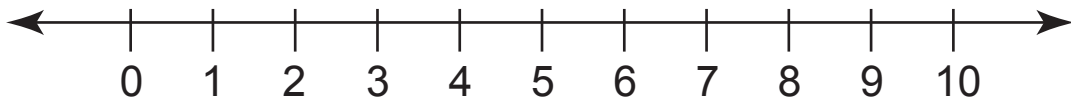
$$4 - 1 = \underline{\quad}$$



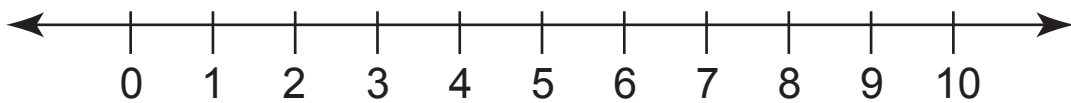
$$3 - 1 = \underline{\quad}$$



$$2 - 1 = \underline{\quad}$$



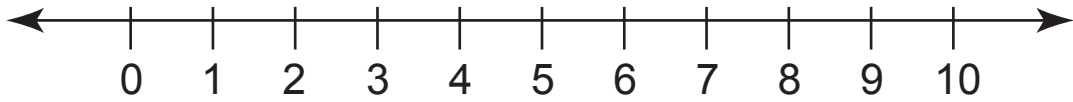
$$6 - 1 = \underline{\quad}$$



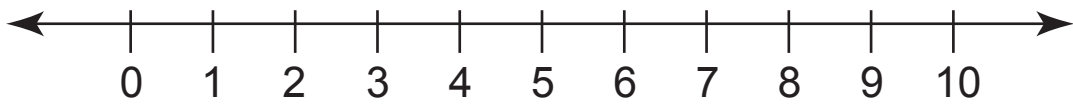
$$5 - 1 = \underline{\quad}$$

Subtracting by 1

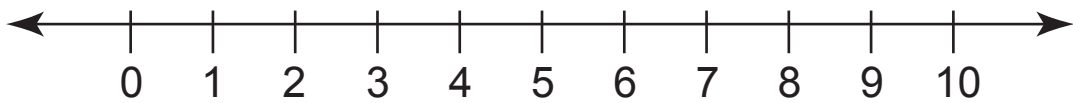
Find the difference using the number line.



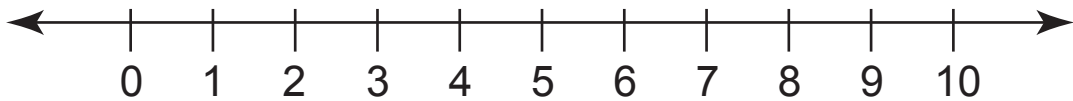
$$9 - 1 = \underline{\quad}$$



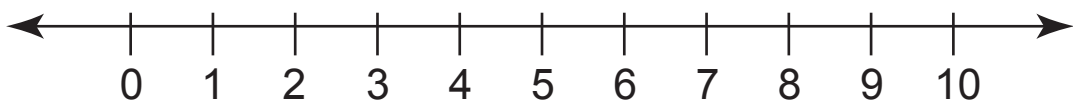
$$3 - 1 = \underline{\quad}$$



$$7 - 1 = \underline{\quad}$$



$$8 - 1 = \underline{\quad}$$



$$4 - 1 = \underline{\quad}$$