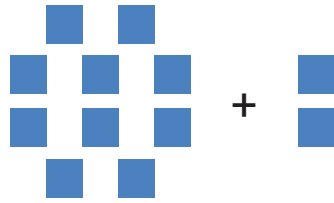


Counting Numbers Beyond 10


Count the shapes and write the numbers in the blank spaces below.



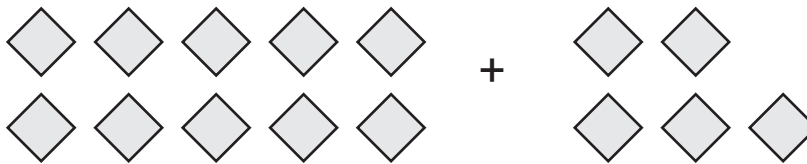
$$\underline{\hspace{2cm}} + \underline{\hspace{2cm}} = 12$$



$$\underline{\hspace{2cm}} + \underline{\hspace{2cm}} = 13$$



$$\underline{\hspace{2cm}} + \underline{\hspace{2cm}} = 16$$




$$\underline{\hspace{2cm}} + \underline{\hspace{2cm}} = 15$$



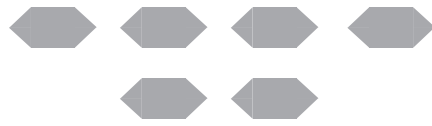
$$\underline{\hspace{2cm}} + \underline{\hspace{2cm}} = 17$$

Counting Numbers Beyond 10

Count the shapes and write the numbers in the blank spaces below.




+



+

= 16

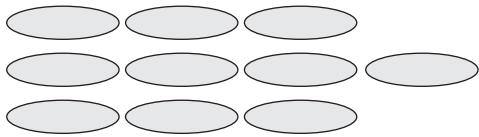


+

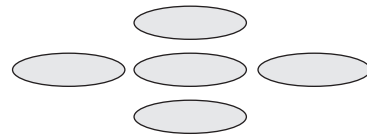


+

= 14




+



+

= 15



+



+

= 12



+



+

= 17

Counting Numbers Beyond 10

Count the shapes and write the numbers in the blank spaces below.

