


## Identify Fractions

Write a fraction for the shaded part. Write a fraction for the unshaded part.



$$\frac{1}{4}$$

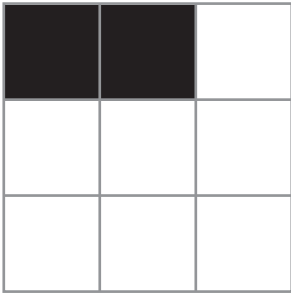
---

shaded

$$\frac{3}{4}$$

---

unshaded




---

shaded

---

unshaded




---

shaded

---

unshaded

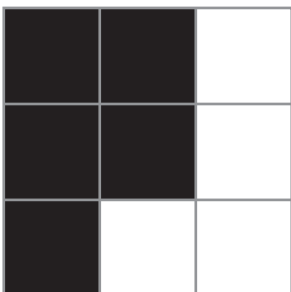


---

shaded

---

unshaded



---

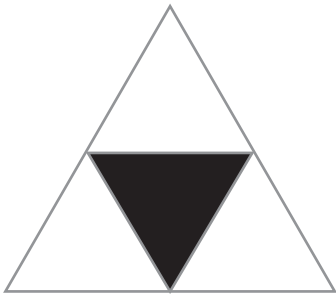
shaded

---

unshaded

## Identify Fractions

Write a fraction for the shaded part. Write a fraction for the unshaded part.


$$\frac{1}{4}$$

---

shaded

$$\frac{3}{4}$$

---

unshaded

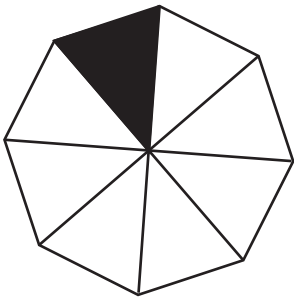


---

shaded

---

unshaded

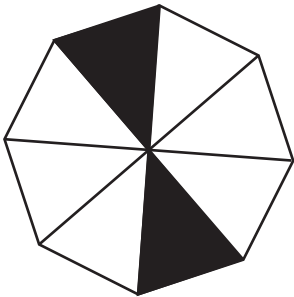


---

shaded

---

unshaded

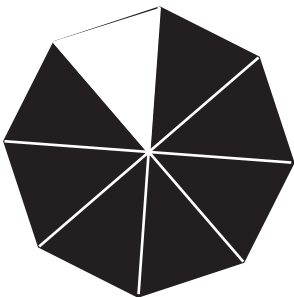


---

shaded

---

unshaded



---

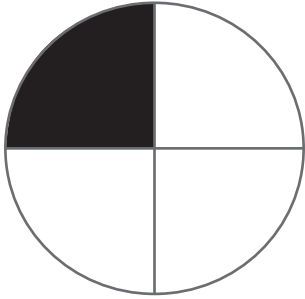
shaded

---

unshaded

## Identify Fractions

Write a fraction for the shaded part. Write a fraction for the unshaded part.



$$\frac{1}{4}$$

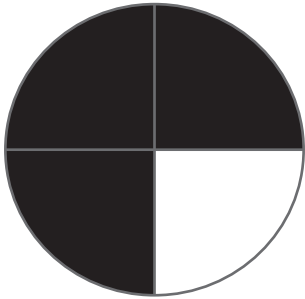
---

shaded

$$\frac{3}{4}$$

---

unshaded

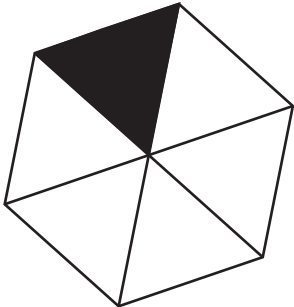


---

shaded

---

unshaded

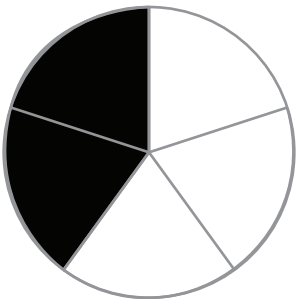


---

shaded

---

unshaded

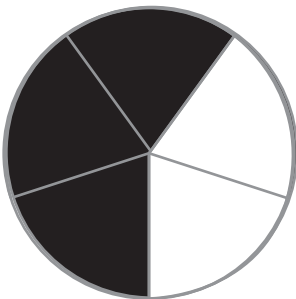


---

shaded

---

unshaded



---

shaded

---

unshaded